



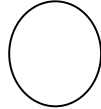


COMPLETEAZA SPATIILE GOALE CU ELEMENTELE CARE SE POTRIVESC:

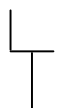
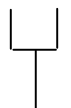
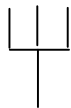
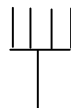
1. 2 4 6 8 10 _____

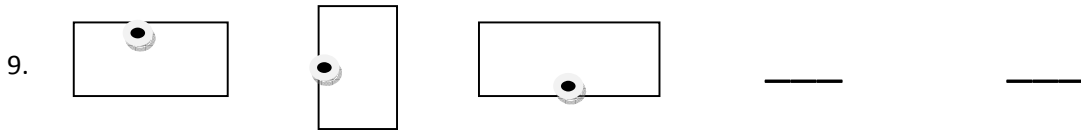
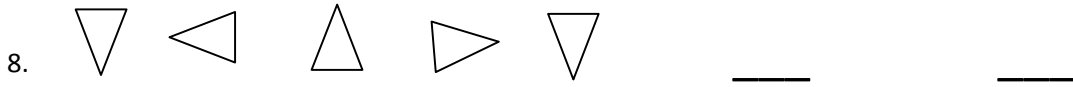
2. 20 19 18 17 16 _____

3.      _____

4.     _____

5.     _____

6.     _____



10. 4 10 16