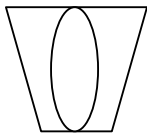
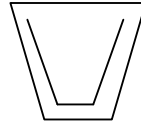
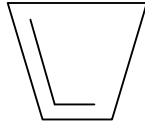
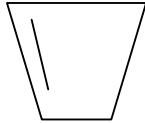
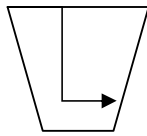

TEST DE INTELIGENTA NR. 6

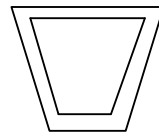
1. Ce imagine continua sirul de mai jos:



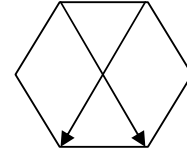
a.



b.



c.



d.

2. Care cuvânt dintre cele din paranteza de mai jos este opusul cuvântului LENES?

(VITEAZ, HARNIC, CURAJOS, INCAPATANAT, TACUT)

3. Ce număr trebuie completat în continuarea numerelor de mai jos:

100, 25, 120, 30, 160,...

4. Care numar NU se potriveste in sirul de mai jos?

8, 16, 24, 32, 35

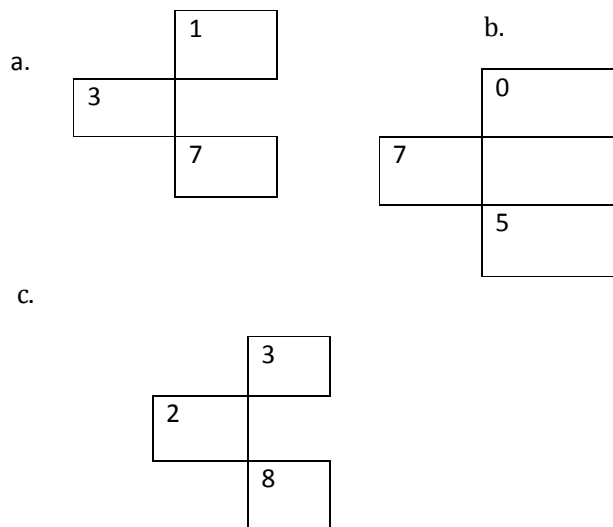
5. LITRUL este pentru VOLUM asa cum METRUL PATRAT este pentru?

CANTITATE, SUPRAFATA, LUNGIME, GREUTATE, INALTIME

6.

10	5	?
12	?	2
15	10	?

Care este sectiunea lipsa?



7. Identificati un cuvant dintre cele de mai jos care sa aiba legatura cu cuvantul DETERGENT :

CURATENIE, VIZITA, PLIMBARE

8. Care element nu se potriveste in sir?

CASA, APARTAMENT, VILA, DELTA, CABANA

Raspunsuri :

1. c.
2. HARNIC.
3. 40 (modul de calcul este urmatorul ($100:4=25;120:4=30;160:4=40$)).
4. 35 (fiecare numar este multiplu de 8 ($8=1\times 8; 16=2\times 8; 24=3\times 8; 32=4\times 8$)).
5. SUPRAFATA.
6. b ($10-5=5-5=0$; $12-5=7-5=2$; $15-5=10-5=5$).
7. CURATENIE.
8. DELTA (restul sunt locuinte).